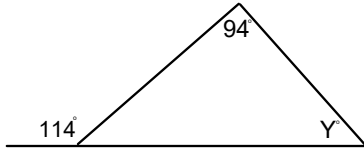
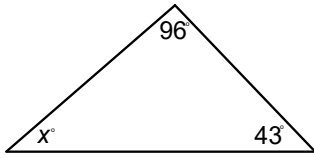
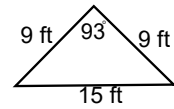
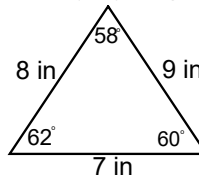


Quiz 4.2-4.3 Review

1. Find the missing angles

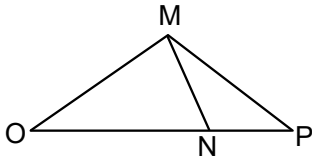


2. Classify by angles and sides.

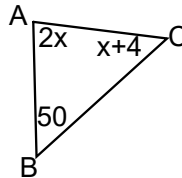


3. Name the vertices of $\triangle MNO$

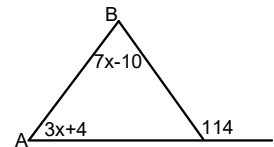
4. Name the sides of $\triangle MNP$



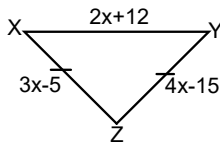
5. Find $m \angle A$



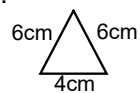
6. Find $m \angle B$



7. The triangle is isosceles. Find the \overline{XY} , the longest side.



8.



Sally makes earrings using the diagram to the right. How many can she make with 85 cm of silver wire?